

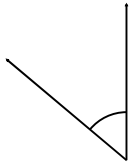
Name: _____

Date: _____

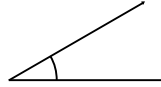
Measuring Angles

Use your protractor to measure the angles.

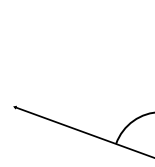
1.



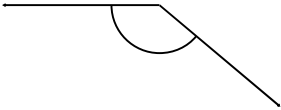
2.



3.



4.



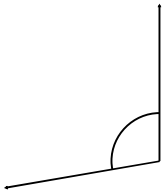
5.



6.



7.



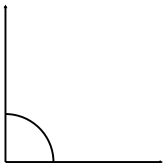
8.



9.



10.



11.



12.



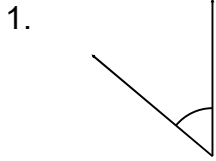
Name: _____

Date: _____


ANSWER KEY

Measuring Angles

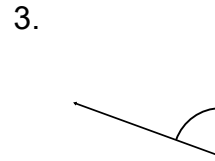
Use your protractor to measure the angles.



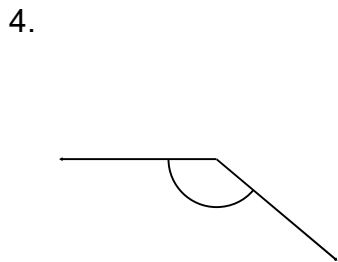
50°



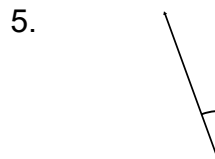
30°



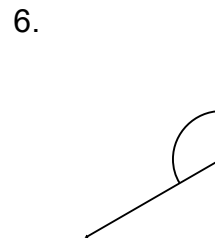
70°



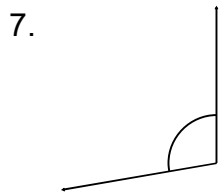
140°




20°



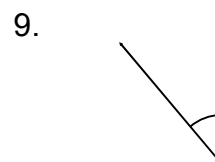
120°



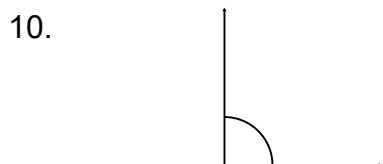
100°



130°



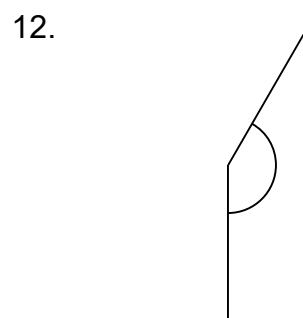
40°



90°



10°



150°