

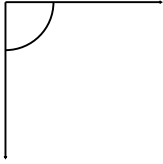
Name: _____

Date: _____

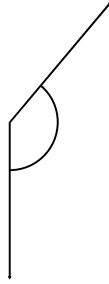
Measuring Angles

Use your protractor to measure the angles.

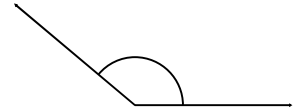
1.



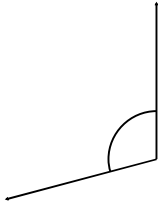
2.



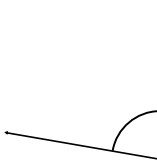
3.



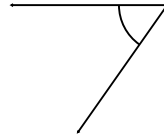
4.



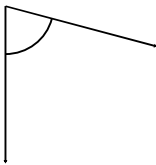
5.



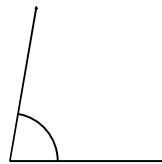
6.



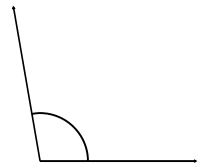
7.



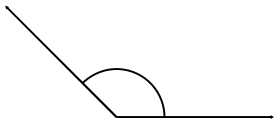
8.



9.



10.



11.



12.



Name: _____

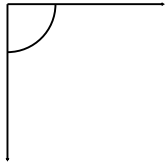
Date: _____

ANSWER KEY

Measuring Angles

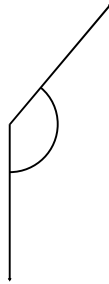
Use your protractor to measure the angles.

1.



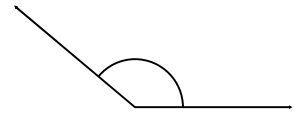
90°

2.



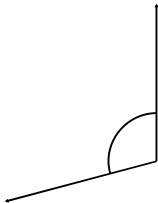
140°

3.



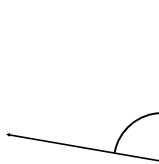
140°

4.



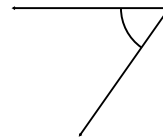
105°

5.



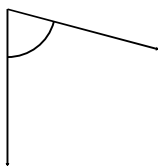
80°

6.



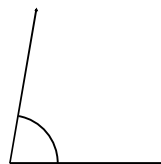
55°

7.



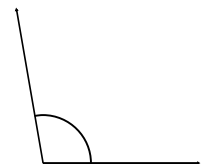
75°

8.



80°

9.



100°

10.



135°

11.



135°

12.



165°