

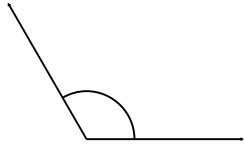
Name: _____

Date: _____

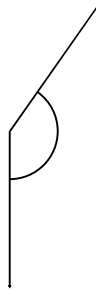
Measuring Angles

Measure and classify the angles.

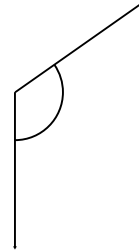
1.



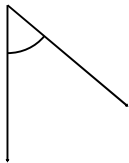
2.



3.



4.



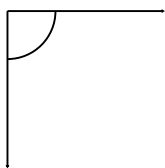
5.



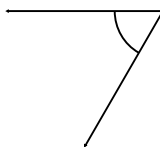
6.



7.



8.



9.



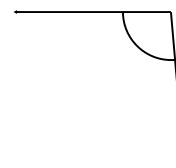
10.



11.



12.



Name: _____

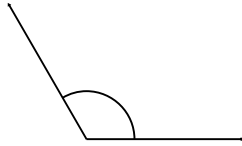
Date: _____

ANSWER KEY

Measuring Angles

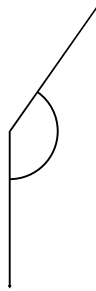
Measure and classify the angles.

1.



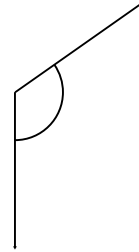
120° Obtuse

2.



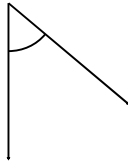
145° Obtuse

3.



125° Obtuse

4.



50° Acute

5.



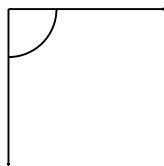
135° Obtuse

6.



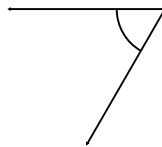
20° Acute

7.



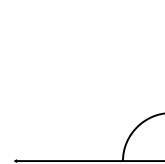
90° Right

8.



60° Acute

9.



90° Right

10.



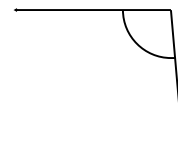
30° Acute

11.



20° Acute

12.



95° Obtuse