

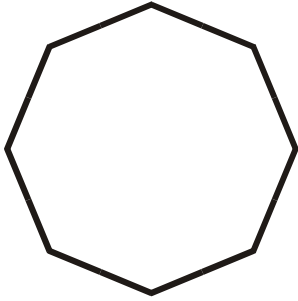
Name: _____

Date: _____

Identifying Polygons

Identify the polygons.

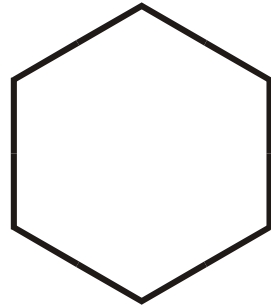
1.



2.



3.



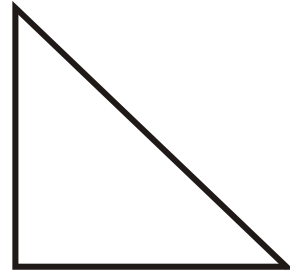
4.



5.



6.



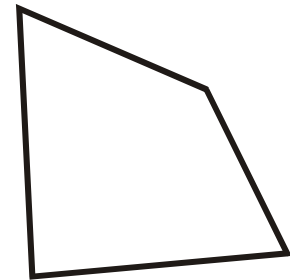
7.



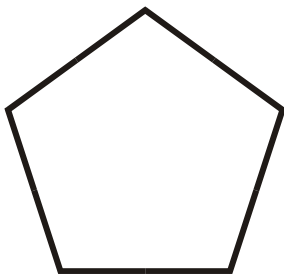
8.



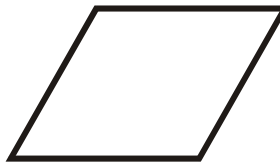
9.



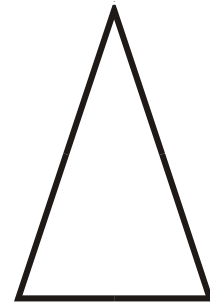
10.



11.



12.



Name: _____

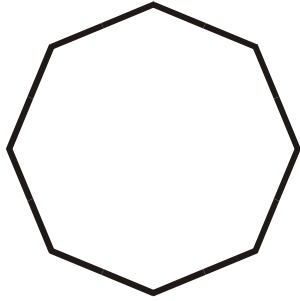
Date: _____

ANSWER KEY

Identifying Polygons

Identify the polygons.

1.



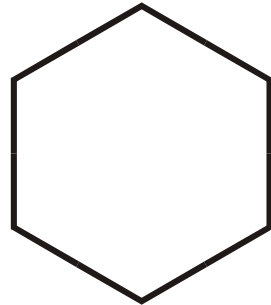
Regular Octagon

2.



Rectangle

3.



Regular Hexagon

4.



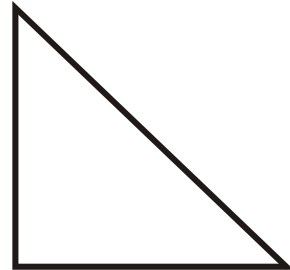
Parallelogram

5.



Square

6.



Right Triangle

7.



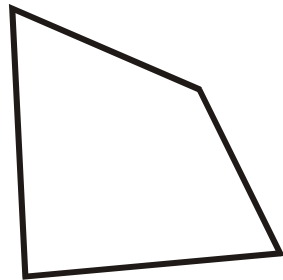
Trapezoid

8.



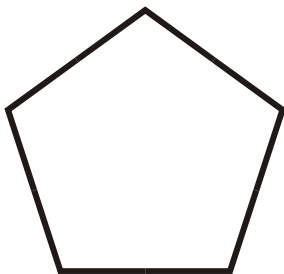
Scalene Triangle

9.



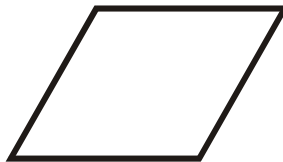
Irregular Quadrilateral

10.




Regular Pentagon

11.



Rhombus

12.



Isosceles Triangle