

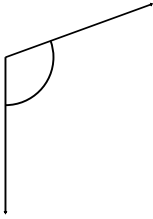
Name: _____

Date: _____

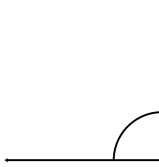
Measuring Angles

Measure and classify the angles.

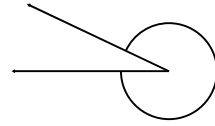
1.



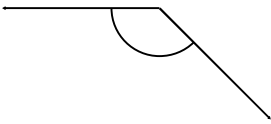
2.



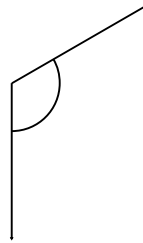
3.



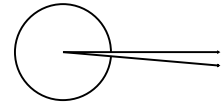
4.



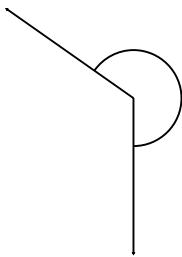
5.



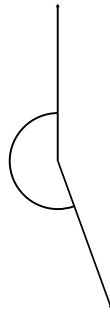
6.



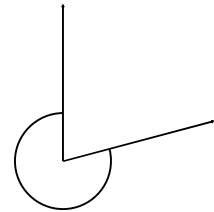
7.



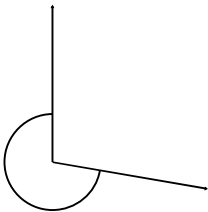
8.



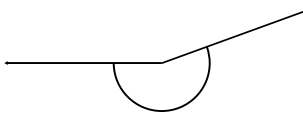
9.



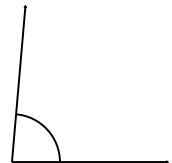
10.



11.



12.



Name: _____

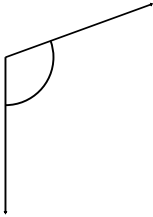
Date: _____

ANSWER KEY

Measuring Angles

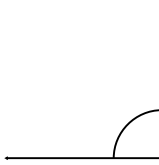
Measure and classify the angles.

1.



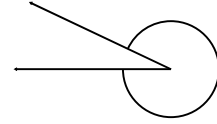
110° Obtuse

2.



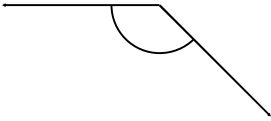
90° Right

3.



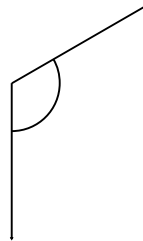
335° Reflex

4.



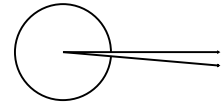
135° Obtuse

5.



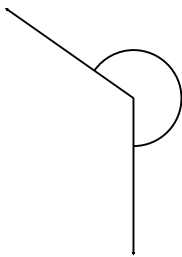
120° Obtuse

6.



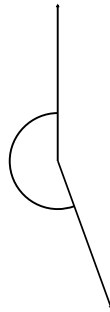
355° Reflex

7.



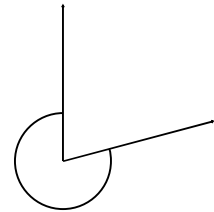
235° Reflex

8.



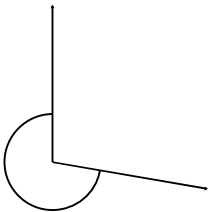
200° Reflex

9.



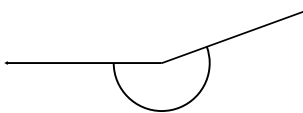
285° Reflex

10.



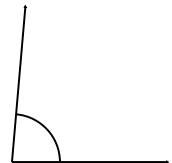
260° Reflex

11.



200° Reflex

12.



85° Acute