


Name: _____

Date: _____

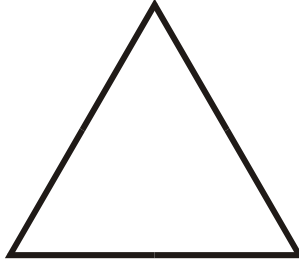
Identifying Polygons

Identify the polygons.

1.



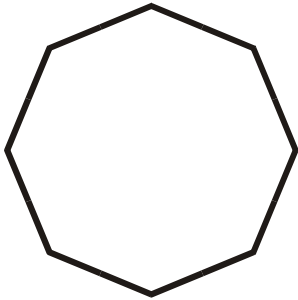
2.



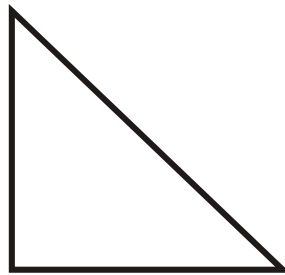
3.



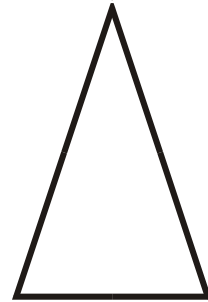
4.



5.



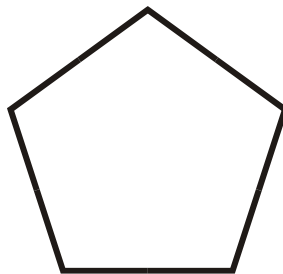
6.



7.



8.



9.



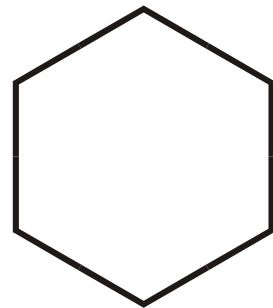
10.



11.




12.



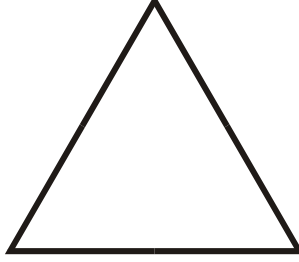
ANSWER KEY**Identifying Polygons**

Identify the polygons.

1.

Square

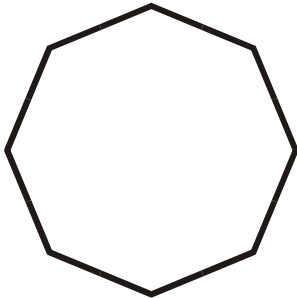
2.

Equilateral Triangle

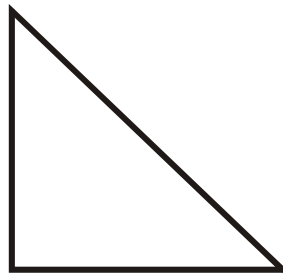
3.

Parallelogram

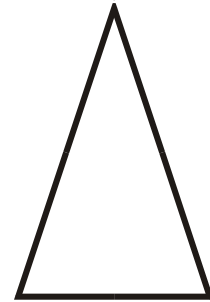
4.

Regular Octagon

5.

Right Triangle

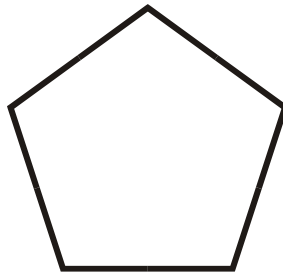
6.

Isosceles Triangle


7.

Trapezoid

8.

Regular Pentagon

9.

Rhombus

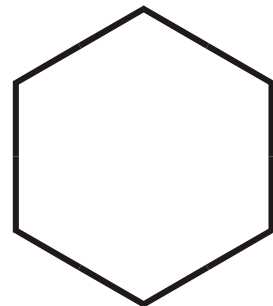
10.

Scalene Triangle

11.

Rectangle

12.

Regular Hexagon