

Name: _____

Date: _____

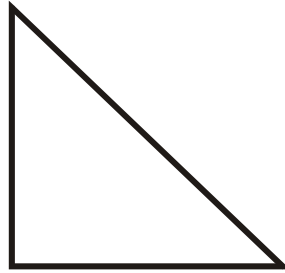
Identifying Polygons

Identify the polygons.


1.



2.



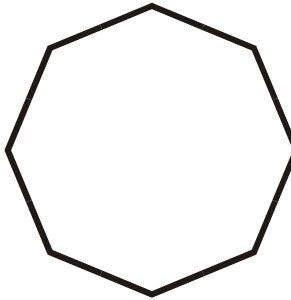
3.



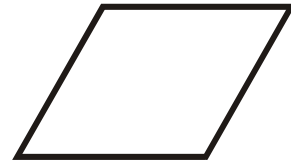
4.



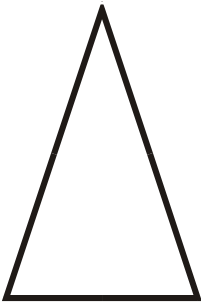
5.



6.



7.



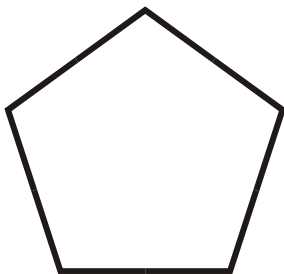
8.




9.



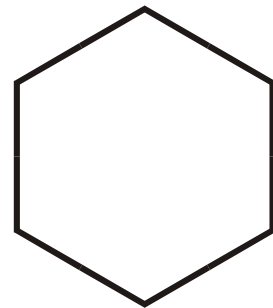
10.



11.



12.



Name: _____

Date: _____

ANSWER KEY

Identifying Polygons

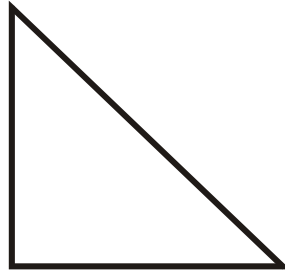
Identify the polygons.

1.




Scalene Triangle

2.



Right Triangle

3.



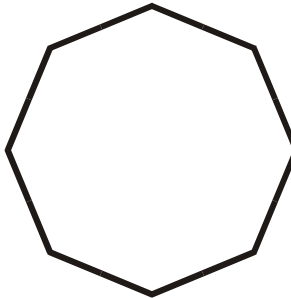
Square

4.



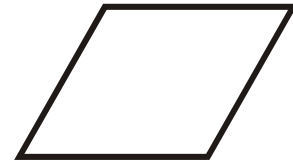
Parallelogram

5.



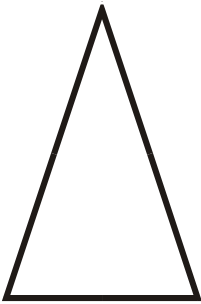
Regular Octagon

6.



Rhombus

7.



Isosceles Triangle

8.



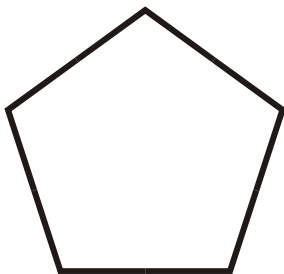
Trapezoid

9.




Rectangle

10.



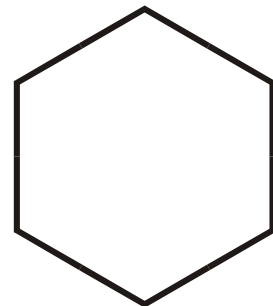
Regular Pentagon

11.



Equilateral Triangle

12.



Regular Hexagon