





























NAME: _____ DATE: _____



LABUBU ADDITION FUN

SOLVE THE LABUBU SUMS AND WRITE YOUR ANSWER IN THE BOX ON THE RIGHT

| | |
|-----------------------------------------------------------------------------------------------------------------------------------------------------------------------------------------------------------------------------------------------------------------------------------------------------------------------------------------------------------------------------------------------------------------------------------------------------------------------------------------------------------------|---------------------------------------------------------------|
|    +   | $\begin{array}{r} 3 \\ + 2 \\ \hline \end{array}$ <div></div> |
|      +  | $\begin{array}{r} 5 \\ + 1 \\ \hline \end{array}$ <div></div> |
|   +   | $\begin{array}{r} 2 \\ + 2 \\ \hline \end{array}$ <div></div> |
|     +  | $\begin{array}{r} 4 \\ + 1 \\ \hline \end{array}$ <div></div> |
|  +   | $\begin{array}{r} 1 \\ + 2 \\ \hline \end{array}$ <div></div> |
|   +    | $\begin{array}{r} 2 \\ + 3 \\ \hline \end{array}$ <div></div> |